



INDIAN SCHOOL AL WADI AL KABIR

DEPARTMENT OF MATHEMATICS (2022-2023)

TOPIC: MEASUREMENTS

RECALL WORKSHEET

RESOURCE PERSON: Ms. Midhat Fatima

NAME: _____ CLASS: III SEC: ____ DATE: _____

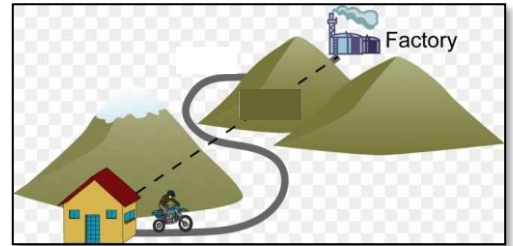
QI. Observe the pictures given below and Tick (✓) the most likely measure.



millilitres / litres




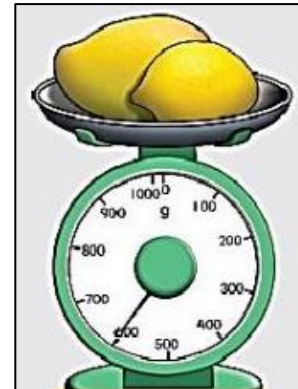



grams / kilograms




metres / kilometres

QII. Read the measurement shown on the weighing scale and write the mass of each object shown in the pictures below using the correct unit.




QIII. Measure the length of the following items using the ruler given and write the answers in the space provided.

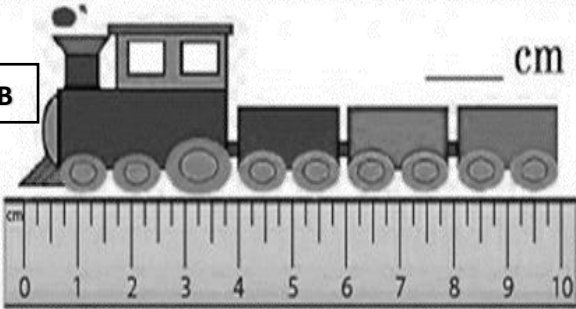
A




D



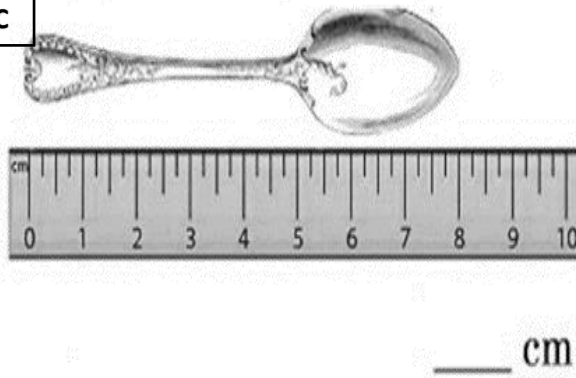
B



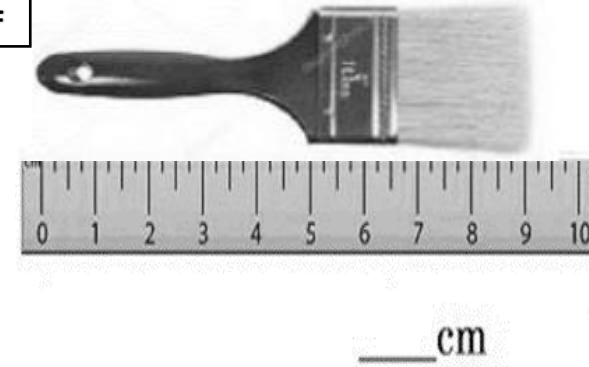
E



C



F



QIV. Fill in the blanks with the correct unit.

- 1 kilogram (kg) = _____ gram (g)
- 50 m = _____ cm
- A litre is a measurement of _____
- The length of your toothbrush will be measured in _____ (mm / cm / m / km)
- We calculate the distance between Chennai and Delhi using _____ (m / km)
- Water in the water tank of the buildings is measured in _____ (ml / l)
- Weight of a horse will be measured in _____ (g / kg)
- The Standard unit of measuring length is _____.

CHECKED BY: ACADEMIC COORDINATOR- MATHEMATICS